



Cambridge IGCSE™

CANDIDATE
NAME

--

CENTRE
NUMBER

--	--	--	--	--

CANDIDATE
NUMBER

--	--	--	--



ADDITIONAL MATHEMATICS

0606/22

Paper 2

May/June 2021

2 hours

You must answer on the question paper.

No additional materials are needed.

INSTRUCTIONS

- Answer **all** questions.
- Use a black or dark blue pen. You may use an HB pencil for any diagrams or graphs.
- Write your name, centre number and candidate number in the boxes at the top of the page.
- Write your answer to each question in the space provided.
- Do **not** use an erasable pen or correction fluid.
- Do **not** write on any bar codes.
- You should use a calculator where appropriate.
- You must show all necessary working clearly; no marks will be given for unsupported answers from a calculator.
- Give non-exact numerical answers correct to 3 significant figures, or 1 decimal place for angles in degrees, unless a different level of accuracy is specified in the question.

INFORMATION

- The total mark for this paper is 80.
- The number of marks for each question or part question is shown in brackets [].

This document has **16** pages.

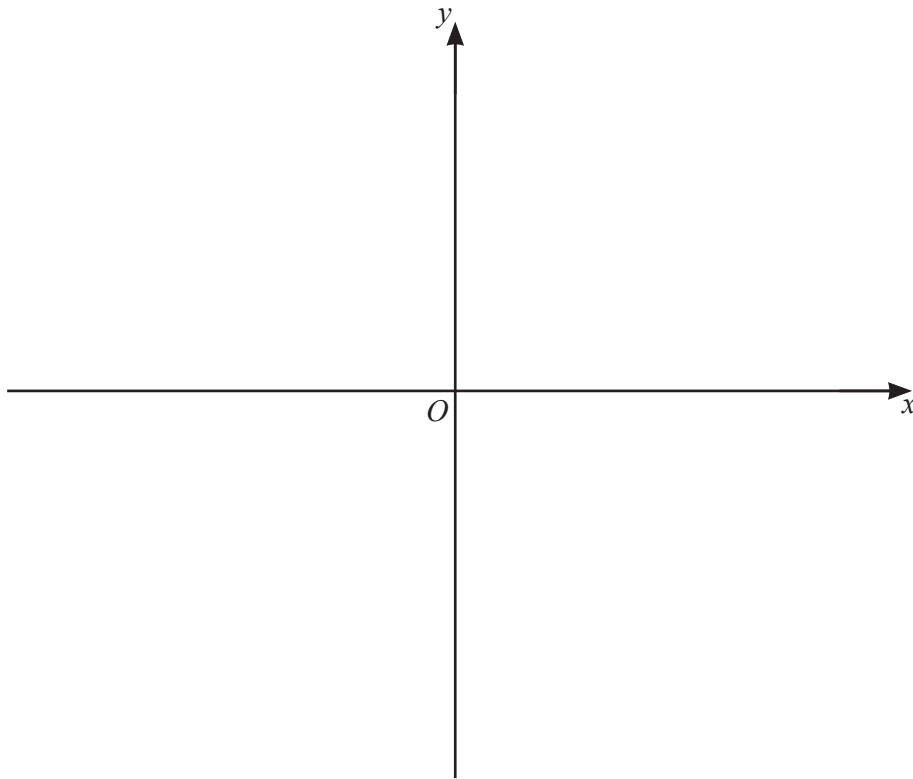
1 Using the binomial theorem, expand $(1 + e^{2x})^4$, simplifying each term.

[2]



2 On the axes, sketch the graph of $y = 3(x - 3)(x - 1)(x + 2)$ stating the intercepts with the coordinate axes.

[3]



3 Find the values of the constant k for which $(2k-1)x^2 + 6x + k + 1 = 0$ has real roots. [5]



4 The polynomial $p(x) = mx^3 - 29x^2 + 39x + n$, where m and n are constants, has a factor $3x - 1$, and remainder 6 when divided by $x - 1$. Show that $x - 2$ is a factor of $p(x)$. [6]



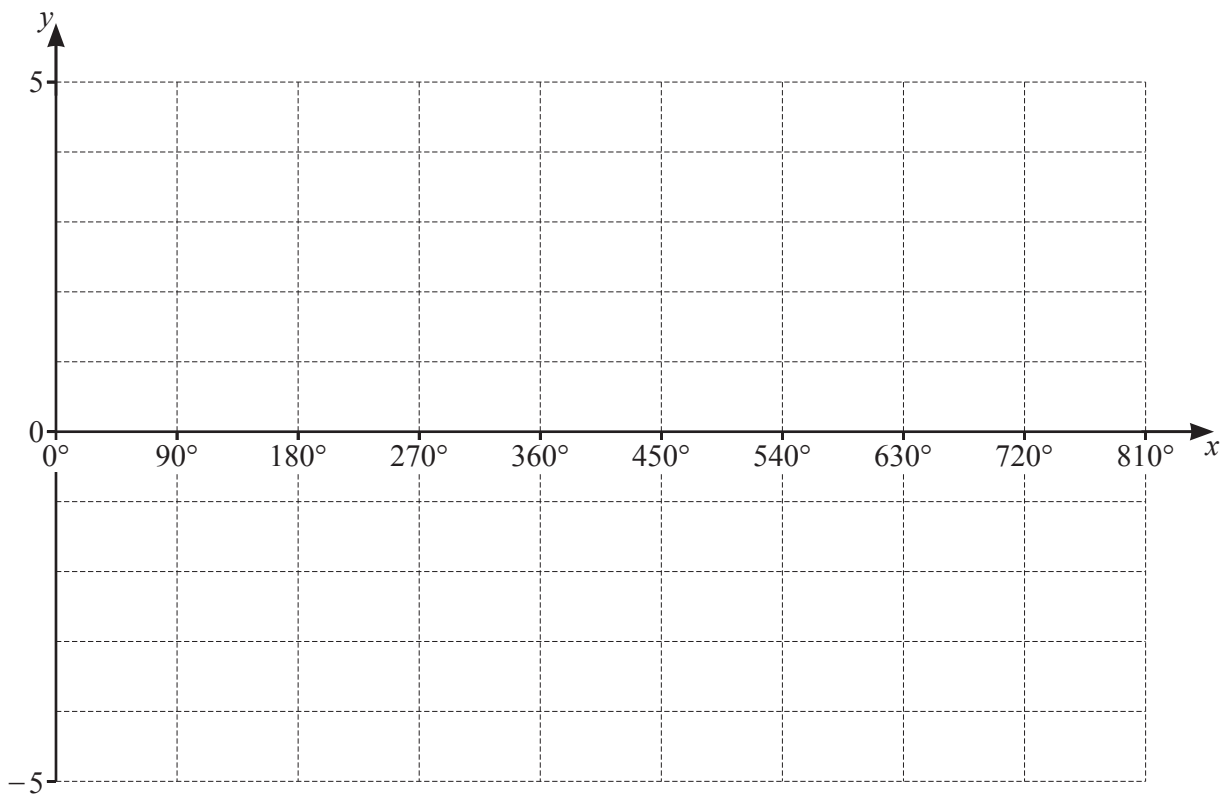
5 The function f is defined, for $0^\circ \leq x \leq 810^\circ$, by $f(x) = -2 + \cos \frac{2x}{3}$.



(a) Write down the amplitude of f . [1]

(b) Find the period of f . [2]

(c) On the axes, sketch the graph of $y = f(x)$. [2]



6 The points $A(5, -4)$ and $C(11, 6)$ are such that AC is the diagonal of a square, $ABCD$.

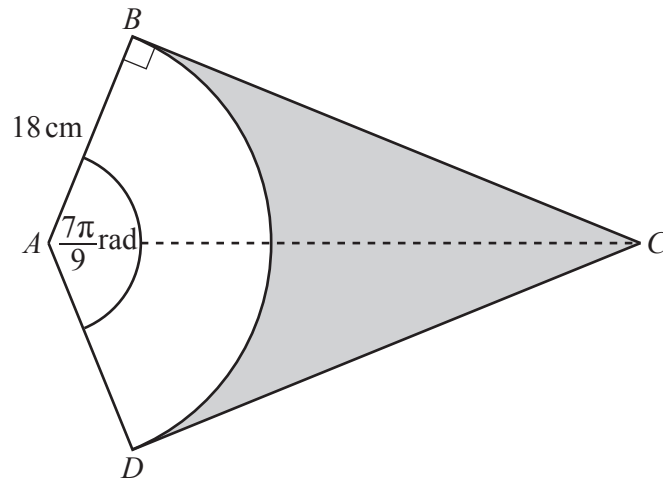


(a) Find the length of the line AC . [2]

(b) (i) The coordinates of the centre, E , of the square are $(8, y)$. Find the value of y . [1]

(ii) Find the equation of the diagonal BD . [3]

(iii) Given that the x -coordinate of B is less than the x -coordinate of D , write \overrightarrow{EB} and \overrightarrow{ED} as column vectors. [2]

7


DAB is a sector of a circle, centre A , radius 18 cm. The lines CB and CD are tangents to the circle.
 Angle DAB is $\frac{7\pi}{9}$ radians.

(a) Find the perimeter of the shaded region. [3]

(b) Find the area of the shaded region. [3]

8 A particle moves in a straight line so that, t seconds after passing through a fixed point O , its velocity, $v \text{ ms}^{-1}$, is given by $v = 3t^2 - 30t + 72$.



(a) Find the distance between the particle's two positions of instantaneous rest. [6]

(b) Find the acceleration of the particle when $t = 2$. [2]

9 Solve the following simultaneous equations.



$$4x^2 + 3xy + y^2 = 8$$

$$xy + 4 = 0$$

[6]

10 (a) Find $\int (e^{x+1})^3 dx$.

[2]



(b) (i) Differentiate, with respect to x , $y = x \sin 4x$.

[2]

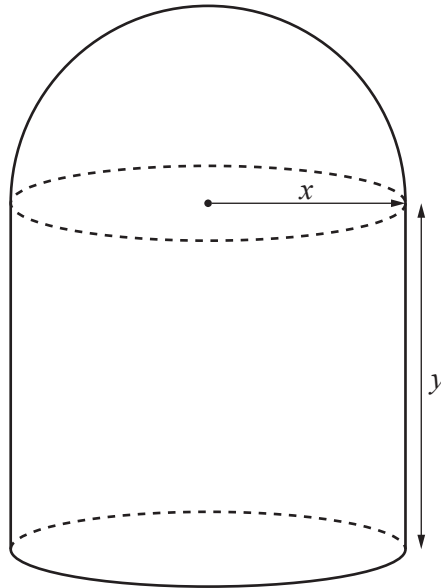
(ii) Hence show that $\int_{\frac{\pi}{4}}^{\frac{\pi}{3}} 4x \cos 4x dx = \frac{1}{8} - \frac{\pi\sqrt{3}}{6}$.

[4]

11 In this question all lengths are in centimetres.



The volume and surface area of a sphere of radius r are $\frac{4}{3}\pi r^3$ and $4\pi r^2$ respectively.



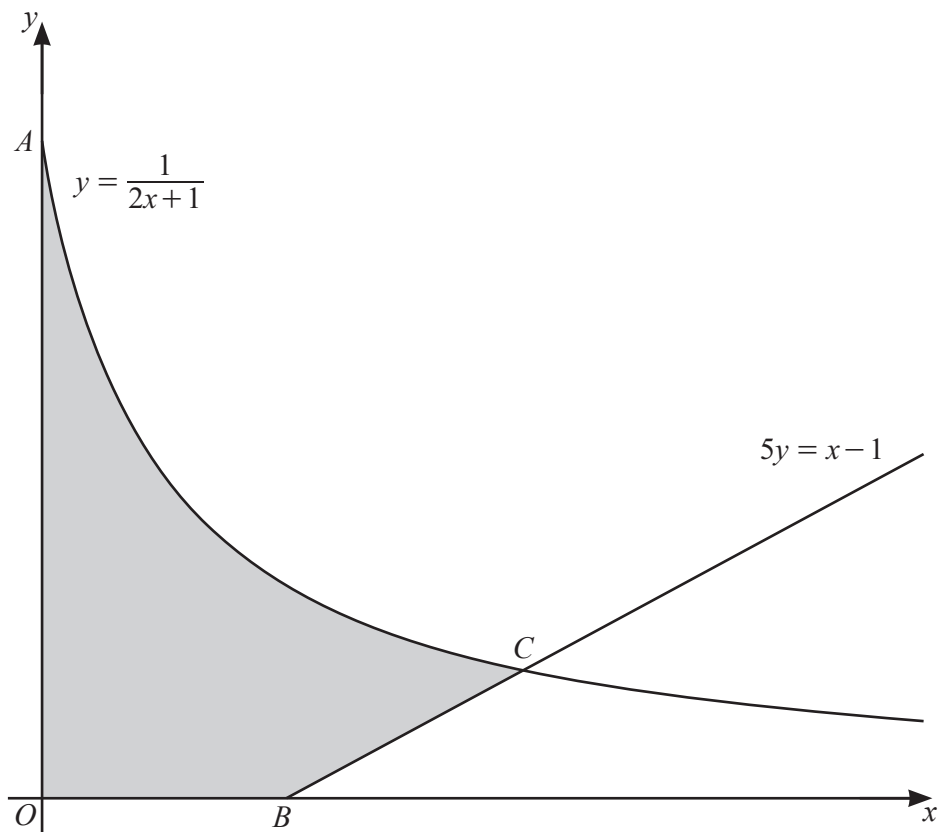
The diagram shows a solid object made from a hemisphere of radius x and a cylinder of radius x and height y . The volume of the object is 500 cm^3 .

(a) Find an expression for y in terms of x and show that the surface area, S , of the object is given by

$$S = \frac{5}{3}\pi x^2 + \frac{1000}{x}. \quad [4]$$

- (b) Given that x can vary and that S has a minimum value, find the value of x for which S is a minimum. [4]

12 DO NOT USE A CALCULATOR IN THIS QUESTION.

The diagram shows part of the curve $y = \frac{1}{2x+1}$ and part of the line $5y = x - 1$.

The curve meets the y -axis at point A . The line meets the x -axis at point B . The line and curve intersect at point C .

(a) (i) Find the coordinates of A and B . [1]

(ii) Verify that the x -coordinate of C is 2. [2]

(b) Find the exact area of the shaded region.

[5]

13 The functions f and g are defined, for $x > 0$, by

7

$$f(x) = \frac{2x^2 - 1}{3x},$$

$$g(x) = \frac{1}{x}.$$

(a) Find and simplify an expression for $fg(x)$. [2]

(b) (i) Given that f^{-1} exists, write down the range of f^{-1} . [1]

(ii) Show that $f^{-1}(x) = \frac{px + \sqrt{qx^2 + r}}{4}$, where p , q and r are integers. [4]