



Cambridge IGCSE™

CANDIDATE
NAME


--

CENTRE
NUMBER

--	--	--	--	--

CANDIDATE
NUMBER

--	--	--	--



ADDITIONAL MATHEMATICS

0606/22

Paper 2

February/March 2022

2 hours

You must answer on the question paper.

No additional materials are needed.

INSTRUCTIONS

- Answer **all** questions.
- Use a black or dark blue pen. You may use an HB pencil for any diagrams or graphs.
- Write your name, centre number and candidate number in the boxes at the top of the page.
- Write your answer to each question in the space provided.
- Do **not** use an erasable pen or correction fluid.
- Do **not** write on any bar codes.
- You should use a calculator where appropriate.
- You must show all necessary working clearly; no marks will be given for unsupported answers from a calculator.
- Give non-exact numerical answers correct to 3 significant figures, or 1 decimal place for angles in degrees, unless a different level of accuracy is specified in the question.

INFORMATION

- The total mark for this paper is 80.
- The number of marks for each question or part question is shown in brackets [].

This document has **16** pages. Any blank pages are indicated.

- 1 A line, L , has equation $4x + 5y = 9$. Points A and B have coordinates $(-6, 7)$ and $(1, 9)$ respectively. Find the equation of the line parallel to L which passes through the mid-point of AB . [3]

- 2 Solve the equation $\log_5(8x + 7) - \log_5 2x = 2$. [3]

3 A group of students, 4 girls and 3 boys, stand in line.



(a) Find the number of different ways the students can stand in line if there are no restrictions. [1]

(b) Find the number of different ways the students can stand in line if the 3 boys are next to each other. [2]

(c) Cam and Dea are 2 of the girls. Find the number of ways the students can stand in line if Cam and Dea are **not** next to each other. [2]

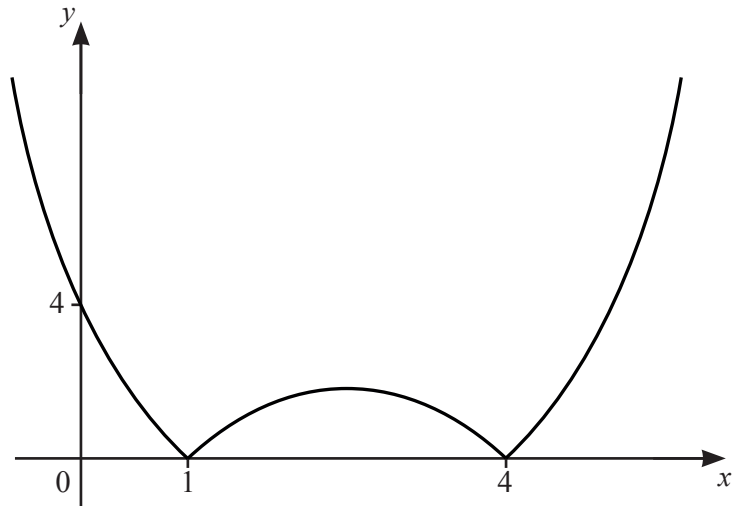
- 4 Find the x -coordinates of the points of intersection of the curves $\frac{x^2}{4} + \frac{y^2}{9} = 1$ and $y = \frac{3}{2x}$.



Give your answers correct to 3 decimal places.

[5]

5 (a)



The diagram shows the graph of $y = |f(x)|$, where $f(x)$ is a quadratic function. Write down the two possible expressions for $f(x)$. [2]

- (b) The three roots of $p(x) = 0$, where $p(x) = 5x^3 + ax^2 + bx - 2$ are $x = \frac{1}{5}$, $x = n$ and $x = n + 1$, where a and b are positive integers and n is a negative integer. Find $p(x)$, simplifying your coefficients. [5]

- 6 (a) (i) Use the binomial theorem to expand $(1 + 3x)^7$ in ascending powers of x , as far as the term in x^3 . Simplify each term. [2]



- (ii) Show that your expansion from **part (i)** gives the value of 1.03^7 as 1.23 to 2 decimal places. [2]

- (b) Find the term independent of x in the expansion of $\left(\frac{x^4}{2} + \frac{2}{x}\right)^{15}$. [2]

7 In this question, all angles are in radians.



(a) Solve the equation $\sec^2\theta = \tan\theta + 3$ for $-\pi < \theta < \pi$.

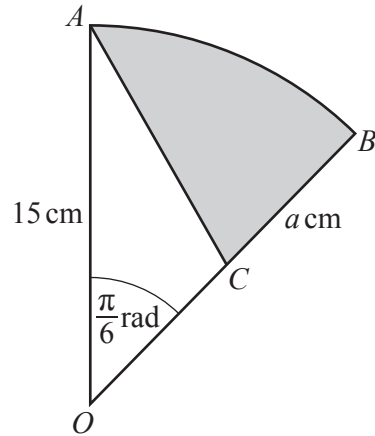
[5]

(b) Show that, for $0 < \phi < \frac{\pi}{2}$, $\frac{\tan \phi}{\sqrt{1 - \cos^2 \phi}} = \sec \phi$.

[3]

(c) Given that $\operatorname{cosec} x = -\frac{17}{8}$ and that $\frac{3\pi}{2} < x < 2\pi$, find the exact value of $\cot x$.

[2]



The diagram shows the sector AOB of a circle, centre O and radius 15 cm . Angle AOB is $\frac{\pi}{6}$ radians. Point C lies on OB such that CB is $a\text{ cm}$. AC is a straight line.

- (a) Find the exact value of a such that the area of triangle AOC is equal to the area of the shaded region ACB . [4]

- (b) For the value of a found in **part (a)**, find the perimeter of the shaded region. Give your answer correct to 1 decimal place. [3]

- 9 (a) A vehicle travels along a straight, horizontal road. At time $t = 0$ seconds, the vehicle, travelling at a velocity of $w \text{ ms}^{-1}$, passes point O . The vehicle travels at this constant velocity for 12 seconds. It then slows down, with constant deceleration, for 10 seconds until it reaches a velocity of $(w - 14) \text{ ms}^{-1}$. It continues to travel at this velocity for 28 seconds until it reaches point A , 458 m from O .

Find the value of w .

[4]

(b) A particle moves in a straight line. The velocity, $v \text{ ms}^{-1}$, of the particle at time t seconds, where $t \geq 0$, is given by $v = (t-4)(t-5)$.

(i) Find the value of t for which the acceleration of the particle is 0 ms^{-2} . [2]

(ii) Find the set of values of t for which the velocity of the particle is negative. [2]

(iii) Find the distance travelled by the particle in the first 5 seconds of its motion. [4]

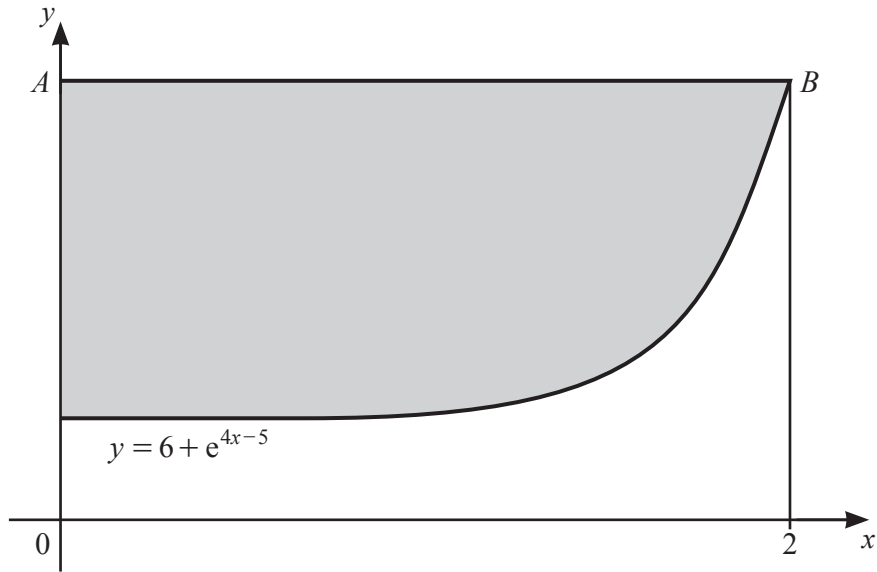
10 Relative to an origin O , the position vector of point P is $3\mathbf{i} - 2\mathbf{j}$ and the position vector of point Q is $8\mathbf{i} + 13\mathbf{j}$.



(a) The point R is such that $\overrightarrow{PQ} = 5\overrightarrow{PR}$. Find the unit vector in the direction \overrightarrow{OR} . [5]

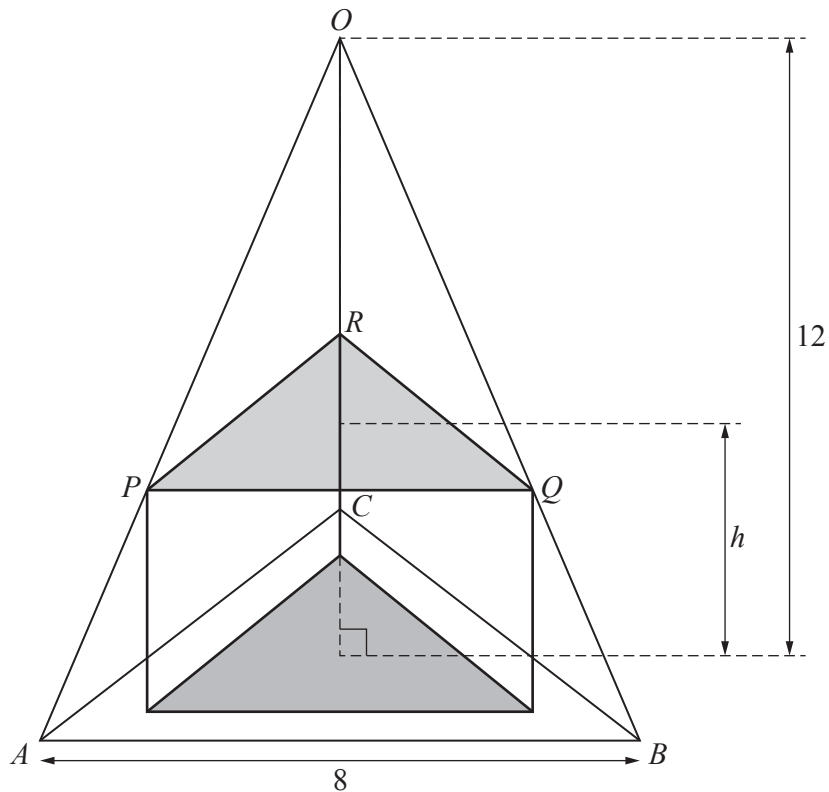
(b) The position vector of S relative to O is $\lambda\mathbf{j}$. Given that RS is parallel to PQ , find the value of λ . [3]

11



The diagram shows part of the graphs of $y = 6 + e^{4x-5}$ and $x = 2$. The line $x = 2$ meets the curve at the point $B(2, b)$ and the line AB is parallel to the x -axis. Find the area of the shaded region. [7]

12 In this question all lengths are in centimetres.



The diagram shows a right triangular prism of height h inside a right pyramid. The pyramid has a height of 12 and a base that is an equilateral triangle, ABC , of side 8. The base of the prism sits on the base of the pyramid. Points P , Q and R lie on the edges OA , OB and OC , respectively, of the pyramid $OABC$. Pyramids $OABC$ and $OPQR$ are similar.

- (a) Show that the volume, V , of the triangular prism is given by $V = \frac{\sqrt{3}}{9}(ah^3 + bh^2 + ch)$ where a , b and c are integers to be found. [4]

- (b) It is given that, as h varies, V has a maximum value. Find the value of h that gives this maximum value of V . [3]