



# Cambridge IGCSE™

CANDIDATE  
NAME

--

CENTRE  
NUMBER

--	--	--	--	--

CANDIDATE  
NUMBER

--	--	--	--



**ADDITIONAL MATHEMATICS**

**0606/02**

Paper 2

**For examination from 2025**

SPECIMEN PAPER

**2 hours**

You must answer on the question paper.

No additional materials are needed.

## INSTRUCTIONS

- Answer **all** questions.
- Use a black or dark blue pen. You may use an HB pencil for any diagrams or graphs.
- Write your name, centre number and candidate number in the boxes at the top of the page.
- Write your answer to each question in the space provided.
- Do **not** use an erasable pen or correction fluid.
- Do **not** write on any bar codes.
- You should use a scientific calculator where appropriate.
- You must show all necessary working clearly.
- Give non-exact numerical answers correct to 3 significant figures, or 1 decimal place for angles in degrees, unless a different level of accuracy is specified in the question.
- For  $\pi$ , use either your calculator value or 3.142.

## INFORMATION

- The total mark for this paper is 80.
- The number of marks for each question or part question is shown in brackets [ ].

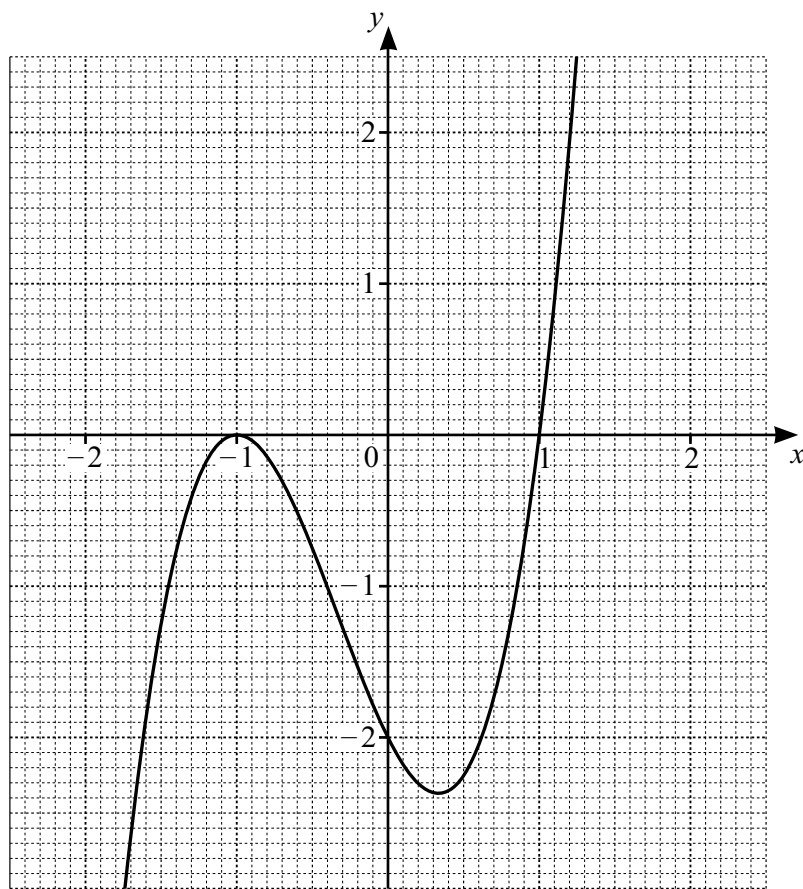
This document has **16** pages. Any blank pages are indicated.

1 (a) Solve the equation  $5|5x - 7| - 1 = 14$ .

[3]



(b)



The diagram shows the graph of  $y = f(x)$ , where  $f(x) = 2(x + 1)^2(x - 1)$ .

Use the graph to solve the inequality  $f(x) \leq -1$ .

[3]

- 2 For variables  $x$  and  $y$ , plotting  $\ln y$  against  $\ln x$  gives a straight-line graph passing through the points (6, 5) and (8, 9).



Show that  $y = e^p x^q$  where  $p$  and  $q$  are integers to be found.

[4]

- 3 Find the values of the constant  $k$  for which the equation  $(2k - 1)x^2 + 6x + k + 1 = 0$  has real roots. [5]



4 A photographer takes 12 different photographs. There are 3 photographs of sunsets, 4 of oceans and 5 of mountains.



(a) The photographs are arranged in a line on a wall.

(i) Find the number of possible arrangements if the first photograph is of a sunset and the last photograph is of an ocean. [2]

(ii) Find the number of possible arrangements if all the photographs of mountains are next to each other. [2]

(b) Three of the photographs are selected for a competition.

(i) Find the number of different possible selections if no photograph of a sunset is chosen. [2]

(ii) Find the number of different possible selections if one photograph of each type (sunset, ocean, mountain) is chosen. [2]

- 5 Given that  $y = \tan x$ , use calculus to find the approximate change in  $y$  as  $x$  increases from  $-\frac{\pi}{4}$  to  $h - \frac{\pi}{4}$ , where  $h$  is small. [3]

- 6 A curve has equation  $y = \ln(5 - 3x)$  where  $x < \frac{5}{3}$ . The normal to the curve at the point where  $x = -5$ , cuts the  $x$ -axis, at the point  $P$ .

Find the equation of the normal and the  $x$ -coordinate of  $P$ . [7]

7 Solutions to this question by accurate drawing will not be accepted.



A circle has equation  $x^2 + y^2 - 16x - 10y + 73 = 0$ .

(a) (i) Find the coordinates of the centre of the circle and the length of the radius. [3]

(ii) Hence show that the point (10, 6.5) lies inside the circle. [2]

(b) A different circle has equation  $(x - 10)^2 + (y - 6.5)^2 = 2.25$ .

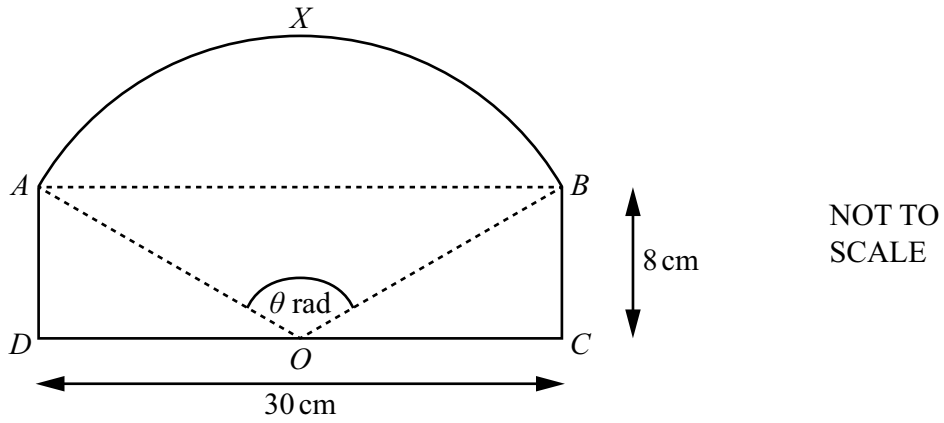
Show that the two circles touch. You are not required to find the coordinates of the common point. [1]

8 (a) (i) Show that  $\frac{\cos^2 2x}{1 + \sin 2x} = 1 - \sin 2x$ . [2]



(ii) Hence solve the equation for  $\frac{3 \cos^2 2x}{1 + \sin 2x} = 1$  for  $0^\circ \leq x \leq 90^\circ$ . [4]

(b) Solve the equation  $\cot\left(y - \frac{\pi}{2}\right) = \sqrt{3}$ , where  $y$  is in radians and  $0 \leq y \leq \pi$ . [3]



The diagram shows a rectangle  $ABCD$  and an arc  $AXB$  of a circle with centre at  $O$ , the midpoint of  $DC$ . The length of  $BC$  is  $8\text{ cm}$  and the length of  $DC$  is  $30\text{ cm}$ . Angle  $AOB$  is  $\theta$  radians.

(a) Find the perimeter of the shape  $ADOCBX$ . [5]

(b) Find the area of the shape  $ADOCBX$ . [2]

10 (a) In the expansion of  $\left(2k - \frac{x}{k}\right)^5$ , where  $k$  is a constant, the coefficient of  $x^2$  is 160.

**R**

Find the value of  $k$ .

[3]

(b) (i) Find the first 3 terms in the expansion of  $(1 + 3x)^6$ , in ascending powers of  $x$ . Simplify the coefficient of each term.

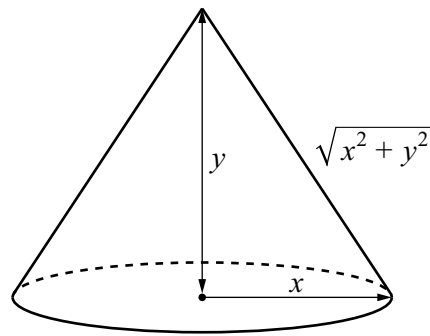
[2]

- (ii) When the expansion of  $(1 + 3x)^6(a + x)^2$  is written in ascending powers of  $x$ , the first three terms are  $4 + 68x + bx^2$ , where  $a$  and  $b$  are constants.

Find the value of  $a$  and the value of  $b$ . [3]

11 In this question, all lengths are in centimetres.

7



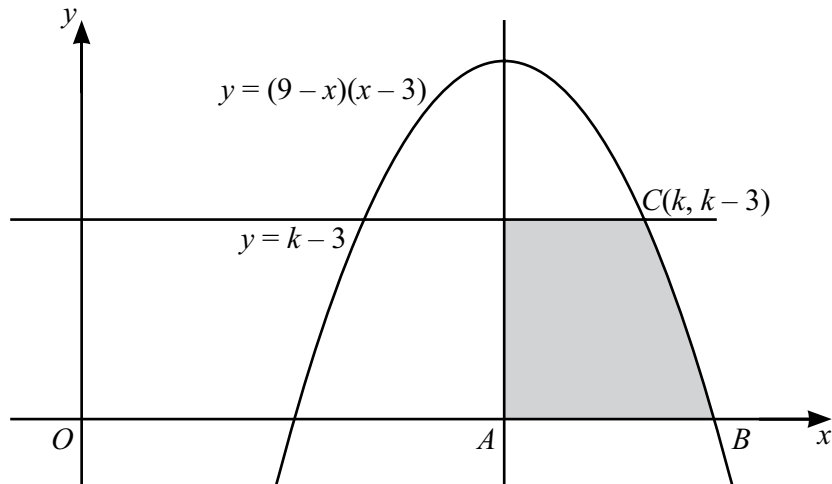
NOT TO  
SCALE

The diagram shows a cone of base radius  $x$ , height  $y$  and sloping edge  $\sqrt{x^2 + y^2}$ . The volume of the cone is  $10\pi \text{ cm}^3$ .

(a) Show that the curved surface area,  $S$ , of the cone is given by  $S = \frac{\pi\sqrt{x^6 + 900}}{x}$ . [3]

(b) Given that  $x$  can vary and that  $S$  has a minimum value, find the value of  $x$  for which  $S$  is a minimum. [5]

12



The diagram shows part of the curve  $y = (9 - x)(x - 3)$  and the line  $y = k - 3$ , where  $k > 3$ . The line through the maximum point of the curve, parallel to the  $y$ -axis, meets the  $x$ -axis at  $A$ . The curve meets the  $x$ -axis at  $B$ , and the line  $y = k - 3$  meets the curve at the point  $C(k, k - 3)$ .

Find the area of the shaded region.

[9]