

1 Write down the number that is 23 less than -1.6 .



..... [1]

2 Write as a fraction in its simplest form.



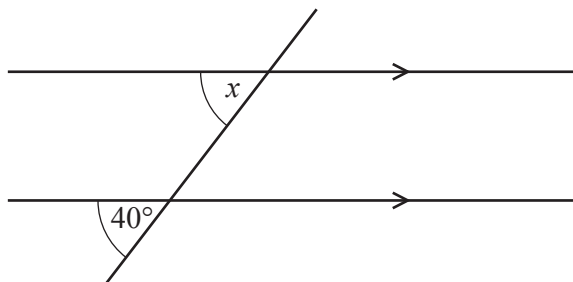
(a) 72%

..... [1]

(b) 0.004

..... [1]

3



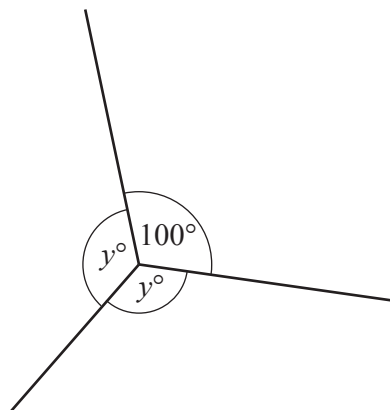
NOT TO SCALE

The diagram shows a pair of parallel lines and a straight line.

Complete the statement with the correct geometrical reason.

$x = 40^\circ$ because the angles are [1]

4



NOT TO SCALE

Find the value of y .

$y =$ [2]

5 Jo invests \$600 for 7 years at a rate of 1.5% per year simple interest.



Calculate the total interest earned during the 7 years.

\$ [2]

6 Maria buys n pencils that cost p cents each.



She pays with a \$ y note.

Find, in terms of n , p and y , the amount of change Maria receives.
Give your answer in cents.

..... cents [2]

7 12 18 29 49 91 125



From the list of numbers, write down

(a) a cube number,

..... [1]

(b) a prime number.

..... [1]

8 Alex changes 190 euros (€) into pounds (£) when £1 = €1.1723 .



Calculate the amount Alex receives.
Give your answer correct to 2 decimal places.

£ [2]

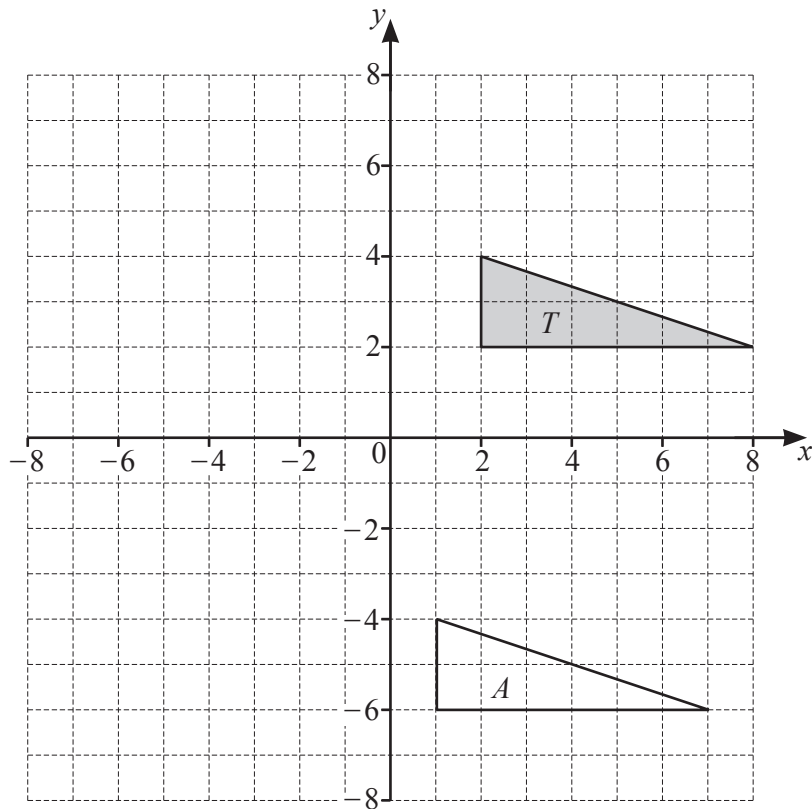
9 Without using a calculator, work out $1\frac{2}{3} \div 7\frac{1}{2}$.

R You must show all your working and give your answer as a fraction in its simplest form.

..... [3]

10

R



(a) Describe fully the **single** transformation that maps triangle *T* onto triangle *A*.

.....
 [2]

(b) Draw the image of triangle *T* after an enlargement, scale factor $-\frac{1}{2}$, centre (0, 0). [2]

11 Simplify $3x^3 \times 4x^4$.

R

..... [2]

12 x is an integer and $-3 \leq 2x - 1 < 3$.



Find the values of x .

..... [2]

13 Expand and simplify.



$$6(t - q) - 2(t - 3q)$$

..... [2]

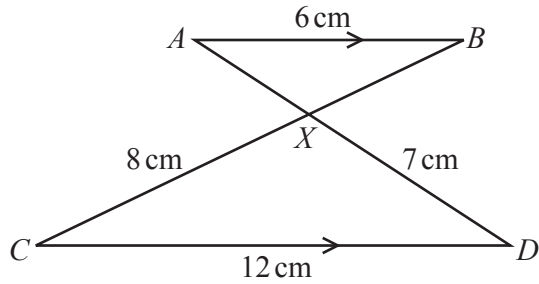
14 The magnitude of the vector $\begin{pmatrix} 20 \\ k \end{pmatrix}$ is 29.



Find the value of k .

$k =$ [3]

15

NOT TO
SCALE

In the diagram, AB is parallel to CD .
 AD and BC intersect at X .
 $AB = 6$ cm, $CD = 12$ cm, $CX = 8$ cm and $DX = 7$ cm.

(a) Complete the statement.

Triangle ABX is to triangle DCX . [1]

(b) Work out the length of BX .

$BX =$ cm [2]

(c) The area of triangle DCX is 26.906 cm².

Use this value to find the area of

(i) triangle ABX ,

..... cm² [2]

(ii) triangle ACX .

..... cm² [1]

16 The sides of a regular hexagon are 80 mm, correct to the nearest millimetre.

R Calculate the lower bound of the perimeter of the hexagon.

..... mm [2]

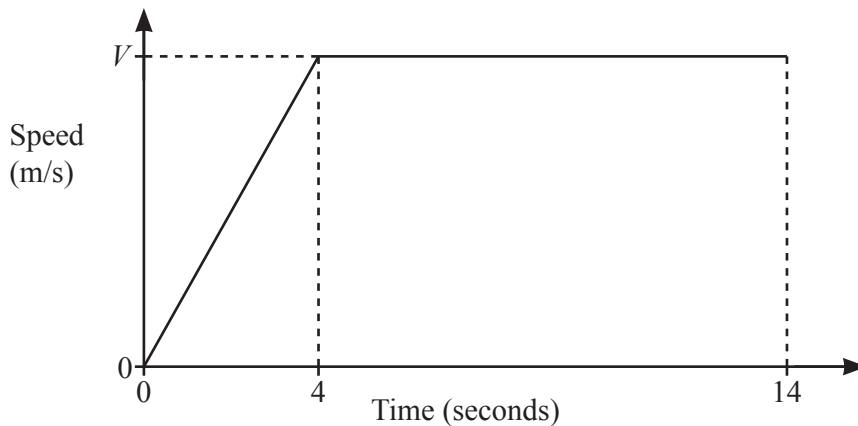
17 The interior angle of a regular polygon is 175° .

R Calculate the number of sides.

..... [2]

18 A car starts from rest and accelerates at a rate of 3 m/s^2 for 4 seconds.
 The car then travels at a constant speed for 10 seconds.

R



NOT TO SCALE

The diagram shows the speed–time graph for this journey.

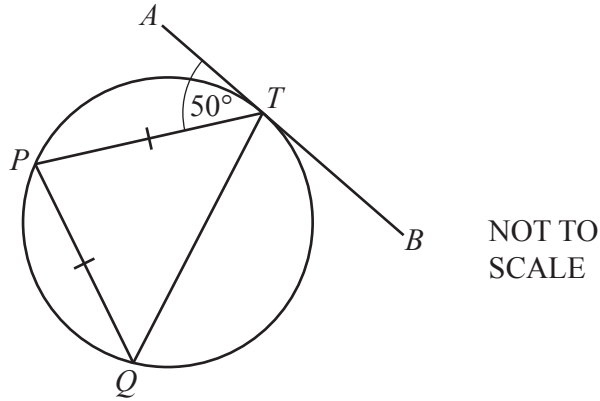
(a) Find the value of V .

$V =$ [1]

(b) Calculate the total distance travelled by the car during the 14 seconds.

..... m [2]

19 (a)

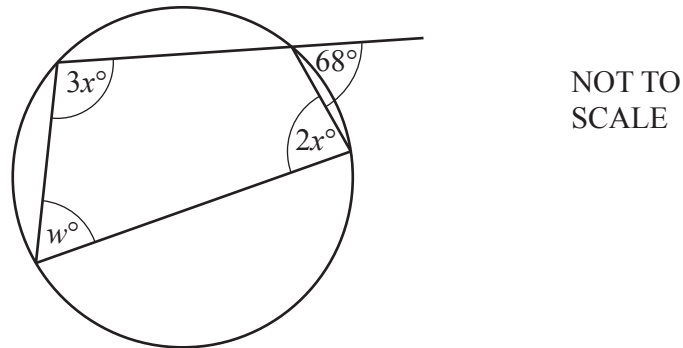


P , Q and T are points on a circle.
 ATB is a tangent to the circle at T and $PT = PQ$.

Find angle TPQ .

Angle $TPQ = \dots\dots\dots$ [2]

(b)



The diagram shows a cyclic quadrilateral with an exterior angle of 68° .

Find the value of w and the value of x .

$w = \dots\dots\dots$

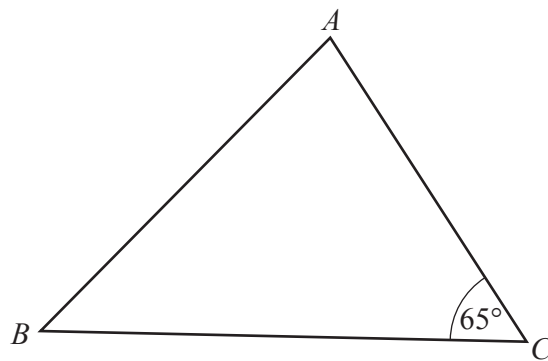
$x = \dots\dots\dots$ [3]

- 20 Simplify $2.1 \times 10^p + 2.1 \times 10^{p-1}$.
 Give your answer in standard form.



..... [2]

21



NOT TO SCALE

The shortest distance from B to AC is 12.8 cm.

Calculate BC .

$BC =$ cm [3]

- 22 z is inversely proportional to the square of $(y - 2)$.
 When $y = 5$, $z = 9$.



Find z in terms of y .

$z =$ [2]

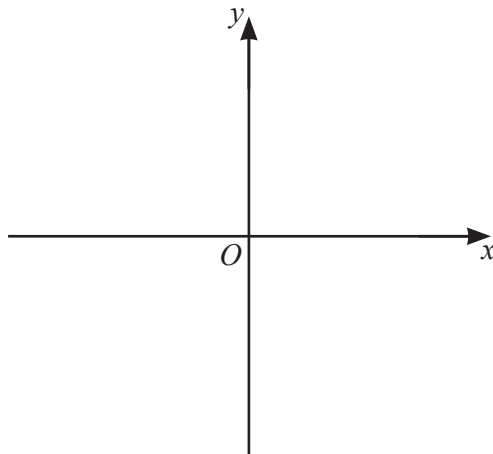
23 A triangle has sides of length 11 cm, 10 cm and 9 cm.

K Calculate the largest angle in the triangle.

..... [4]

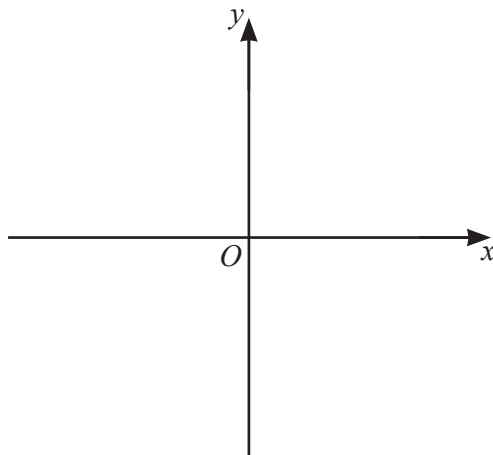
24 On the axes, sketch the graph of each of these functions.

K (a) $y = \frac{2}{x}$



[2]

(b) $y = 2^{-x}$



[2]

25 Find the x -coordinates of the points on the graph of $y = x^5 - 5x^4$ where the gradient is 0.

7

..... [4]

26 Malik goes to a shop every day to buy bread.

7

On any day, the probability that Malik goes to the shop in the morning is 0.7 .

If he goes in the morning, the probability that there is bread for Malik to buy is 0.95 .

If he goes later, the probability that there is bread for Malik to buy is 0.6 .

Calculate the probability that, on any day, there is bread for Malik to buy.

..... [3]