

1 A grocer sells potatoes, mushrooms and carrots.



(a) A customer buys 3 kg of mushrooms at \$1.04 per kg and 4 kg of carrots at \$1.28 per kg.

Calculate the total cost.

\$ [2]

(b) In one week, the ratio of the masses of vegetables sold by the grocer is

potatoes : mushrooms : carrots = 11 : 8 : 6.

(i) Work out the mass of mushrooms sold as a percentage of the total mass.

..... % [2]

(ii) The total mass of potatoes, mushrooms and carrots sold is 1500 kg.

Find the mass of carrots the grocer sells this week.

..... kg [2]

(iii) The profit the grocer makes selling 1 kg of carrots is \$0.75 .

Find the total profit the grocer makes selling carrots this week.

\$ [1]

- (iv) On the last day of the week, the grocer reduces the price of 1 kg of potatoes by 8% to \$1.15 .
Calculate the original price of 1 kg of potatoes.

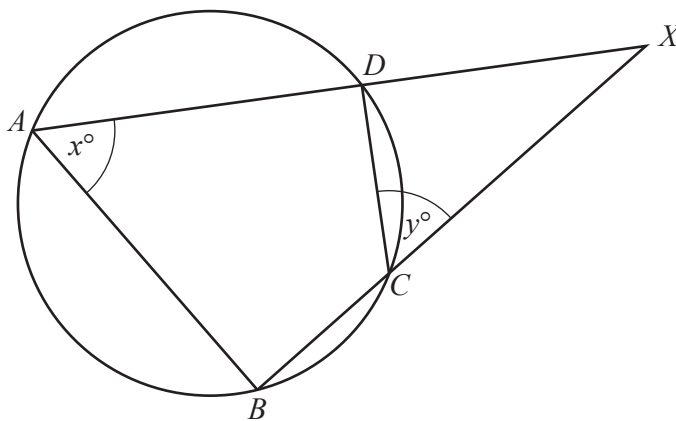
\$ [2]

- (c) The grocer buys 620 kg of onions, correct to the nearest 20 kg.
He packs them into bags each containing 5 kg of onions, correct to the nearest 1 kg.

Calculate the upper bound for the number of bags of onions that he packs.

..... [3]

2
R



NOT TO
SCALE

*A, B, C and D are points on a circle.
ADX and BCX are straight lines.
Angle BAD = x° and angle DCX = y° .*

- (a) Explain why $x = y$.
Give a geometrical reason for each statement you make.

[2]

- (b) Show that triangle ABX is similar to triangle CDX .

[2]

- (c) $AD = 15$ cm, $DX = 9$ cm and $CX = 12$ cm.

- (i) Find BC .

$BC = \dots\dots\dots$ cm [3]

- (ii) Complete the statement.

The ratio area of triangle ABX : area of triangle $CDX = \dots\dots\dots : 1$.

[1]

- 3 (a) The table shows information about the marks gained by each of 10 students in a test.

7

Mark	15	16	17	18	19	20
Frequency	4	1	2	1	0	2

- (i) Calculate the range.

..... [1]

- (ii) Calculate the mean.

..... [3]

- (iii) Find the median.

..... [1]

- (iv) Write down the mode.

..... [1]

- (b) Paulo's mean mark for 7 homework tasks is 17.
After completing the 8th task, his mean mark is 17.5 .

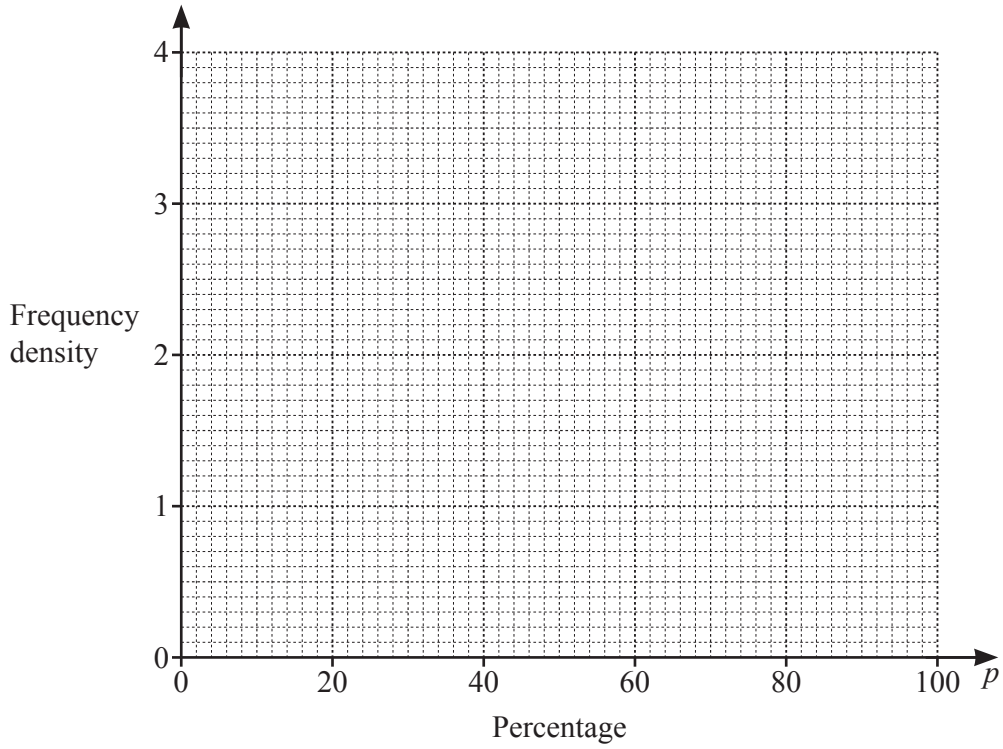
Calculate Paulo's mark for the 8th task.

..... [3]

(c) The table shows the percentage scored by each of 100 students in their final exam.

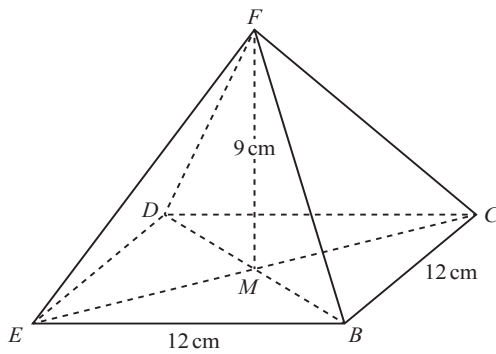
Percentage (p)	$0 < p \leq 30$	$30 < p \leq 50$	$50 < p \leq 60$	$60 < p \leq 70$	$70 < p \leq 100$
Frequency	12	18	35	20	15

On the grid, draw a histogram to show this information.



[4]

4 (a)



NOT TO SCALE

The diagram shows a pyramid with a square base $BCDE$.
 The diagonals CE and BD intersect at M , and the vertex F is directly above M .
 $BE = 12$ cm and $FM = 9$ cm.

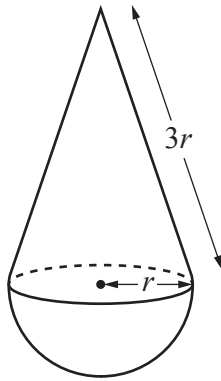
(i) Calculate the volume of the pyramid.

..... cm^3 [2]

(ii) Calculate the total surface area of the pyramid.

..... cm^2 [5]


(b)



NOT TO
SCALE

The diagram shows a toy made from a cone and a hemisphere.
 The base radius of the cone and the radius of the hemisphere are both r cm.
 The slant height of the cone is $3r$ cm.
 The total surface area of the toy is 304 cm^2 .
 Calculate the value of r .

$r =$ [4]

- 5 (a) (i) Factorise.
 $x^2 - x - 12$

..... [2]

- (ii) Simplify.

$$\frac{x^2 - 16}{x^2 - x - 12}$$

..... [2]

- (b) Simplify.
 $(2x - 3)^2 - (x + 1)^2$

..... [3]

- (c) Write as a single fraction in its simplest form.

$$\frac{2x + 4}{x + 1} - \frac{x}{x - 3}$$

..... [4]

(d) Expand and simplify.

$$(x-3)(x-5)(2x+1)$$

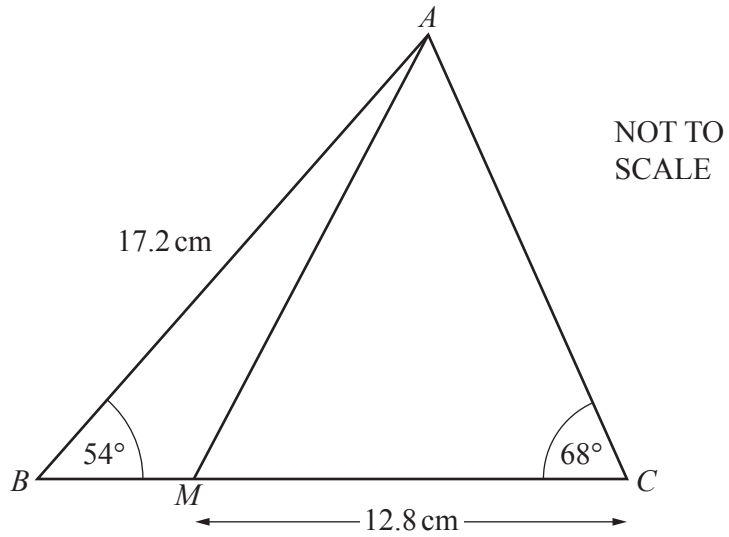
..... [3]

(e) Solve the simultaneous equations.
You must show all your working.

$$\begin{aligned}x - 3y &= 13 \\ 2x^2 - 9y &= 116\end{aligned}$$

$$x = \dots\dots\dots y = \dots\dots\dots$$

$$x = \dots\dots\dots y = \dots\dots\dots [6]$$



The diagram shows triangle ABC with $AB = 17.2\text{ cm}$.
 Angle $ABC = 54^\circ$ and angle $ACB = 68^\circ$.

(a) Calculate AC .

$AC = \dots\dots\dots\text{ cm}$ [3]

(b) M lies on BC and $MC = 12.8\text{ cm}$.

Calculate AM .

$AM = \dots\dots\dots\text{ cm}$ [3]

(c) Calculate the shortest distance from A to BC .

$\dots\dots\dots\text{ cm}$ [3]

7 (a) $\mathbf{p} = \begin{pmatrix} 8 \\ -5 \end{pmatrix}$ $\mathbf{q} = \begin{pmatrix} -4 \\ 5 \end{pmatrix}$



(i) Find $3\mathbf{q}$.

$\begin{pmatrix} \\ \end{pmatrix}$ [1]

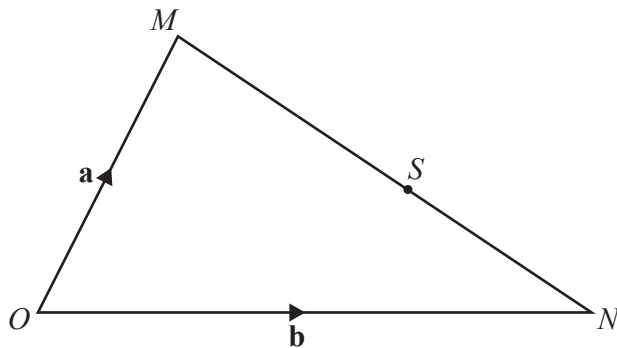
(ii) (a) Find $\mathbf{p} - \mathbf{q}$.

$\begin{pmatrix} \\ \end{pmatrix}$ [1]

(b) Find $|\mathbf{p} - \mathbf{q}|$.

..... [2]

(b)



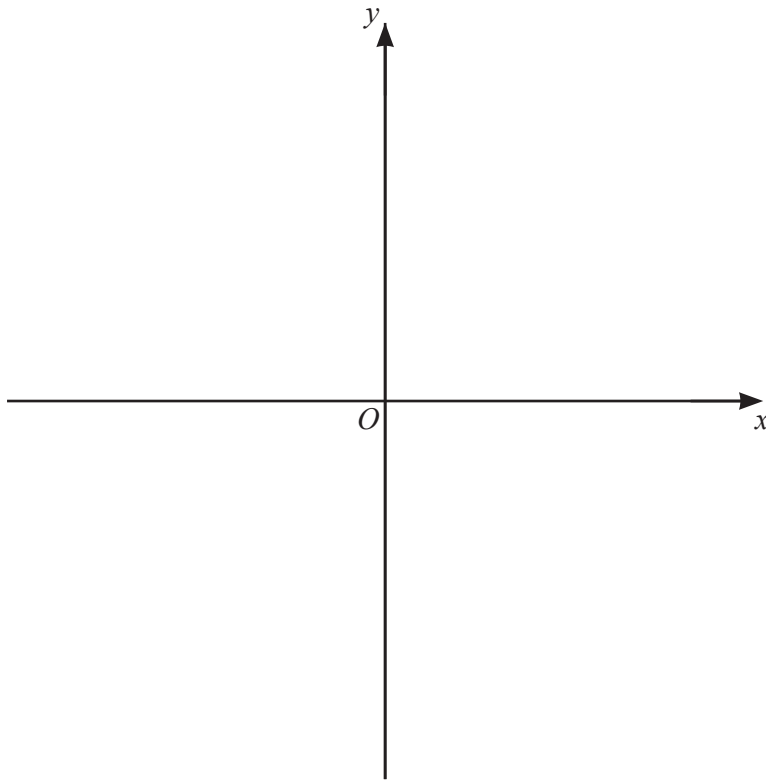
NOT TO SCALE

In triangle OMN , O is the origin, $\vec{OM} = \mathbf{a}$ and $\vec{ON} = \mathbf{b}$.
 S is a point on MN such that $MS : SN = 5 : 3$.

Find, in terms of \mathbf{a} and/or \mathbf{b} , the position vector of S .
 Give your answer in its simplest form.

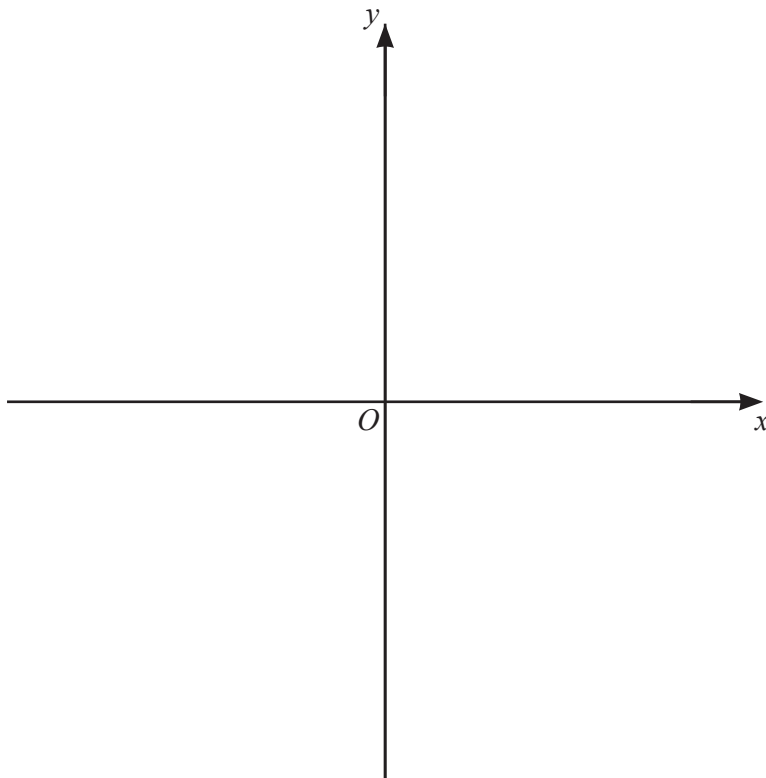
..... [3]

- 8 (a) On the axes, sketch the graph of $y = 4 - 3x$.



[2]

- (b) On the axes, sketch the graph of $y = -x^2$.



[2]

- (c) (i) Find the coordinates of the turning points of the graph of $y = 10 + 9x^2 - 2x^3$.
You must show all your working.

(..... ,) and (..... ,) [5]

- (ii) Determine whether each turning point is a maximum or a minimum.
Show how you decide.

[3]

- 9 (a) Janna and Kamal each invest \$8000.
 At the end of 12 years, they each have \$12 800.



- (i) Janna invests in an account that pays simple interest at a rate of $r\%$ per year.

Calculate the value of r .

$$r = \dots\dots\dots [3]$$

- (ii) Kamal invests in an account that pays compound interest at a rate of $R\%$ per year.

Calculate the value of R .

$$R = \dots\dots\dots [3]$$

- (b) The population of a city is growing exponentially at a rate of 1.8% per year.
 The population now is 260 000.

Find the number of complete years from now when the population will first be more than 300 000.

..... years [3]

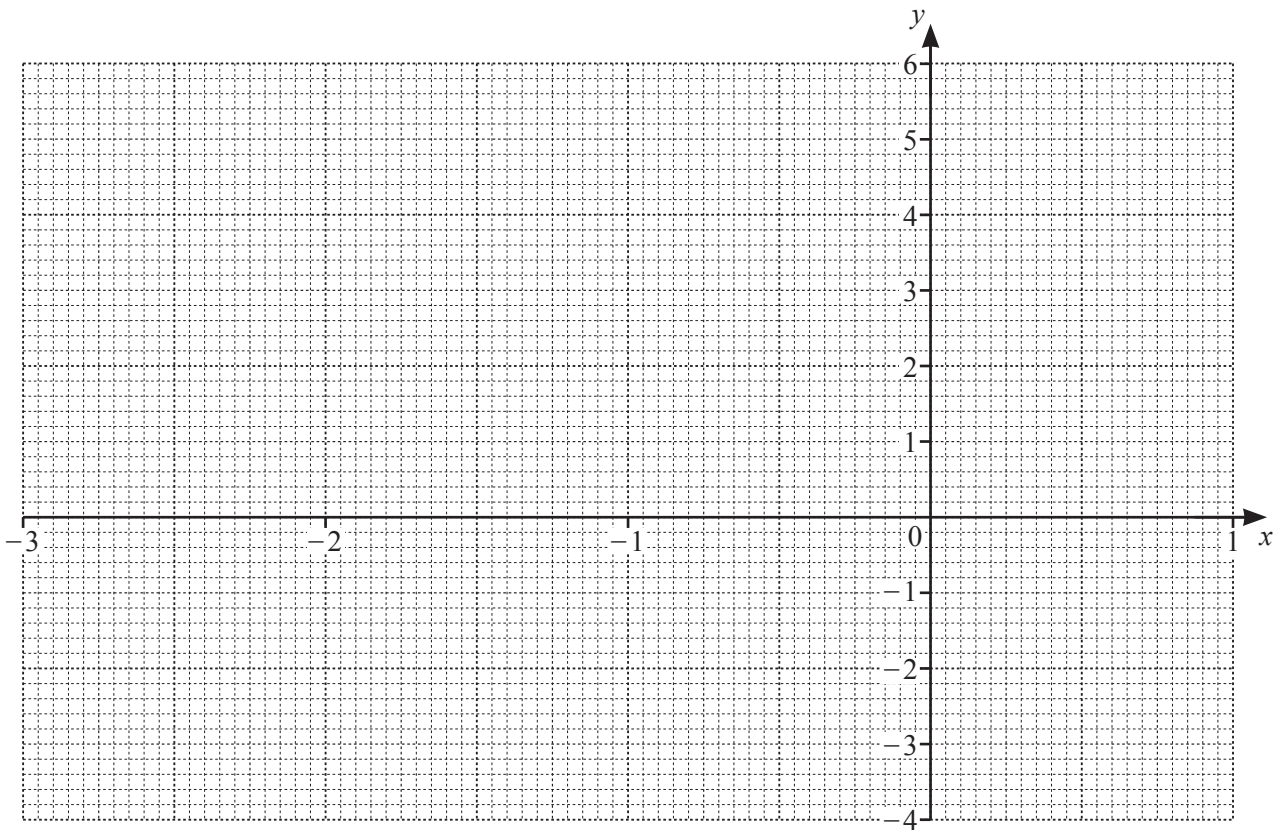
10 The table shows some values for $y = 2x^3 + 6x^2 - 2.5$.

7

x	-3	-2.5	-2	-1.5	-1	-0.5	0	0.5	1
y		3.75	5.5	4.25	1.5		-2.5	-0.75	

(a) Complete the table. [3]

(b) On the grid, draw the graph of $y = 2x^3 + 6x^2 - 2.5$ for $-3 \leq x \leq 1$.



[4]

(c) By drawing a suitable line on the graph, solve the equation $2x^3 + 6x^2 = 4.5$.

$x = \dots\dots\dots$ or $x = \dots\dots\dots$ or $x = \dots\dots\dots$ [3]

(d) The equation $2x^3 + 6x^2 - 2.5 = k$ has exactly two solutions.

Write down the two possible values of k .

$k = \dots\dots\dots$ or $k = \dots\dots\dots$ [2]

11 $f(x) = \frac{1}{x}, x \neq 0$ $g(x) = 3x - 5$ $h(x) = 2^x$



(a) Find.

(i) $gf(2)$

..... [2]

(ii) $g^{-1}(x)$

$g^{-1}(x) =$ [2]

(b) Find in its simplest form $g(x - 2)$.

..... [2]

(c) Find the value of x when

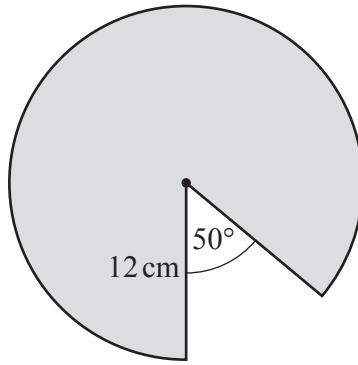
(i) $fg(x) = 0.1$

$x =$ [2]

(ii) $h(x) - g(7) = 0.$

$x =$ [2]

12 (a)



NOT TO SCALE

The diagram shows a circle of radius 12 cm, with a sector removed.

Calculate the perimeter of the remaining shaded shape.

..... cm [4]

(b) The diagram in **part(a)** shows the top of a cylindrical cake with a slice removed. The volume of cake that remains is 3510 cm^3 .

Calculate the height of the cake.

..... cm [3]