

1

61	62	63	64	65	66	67	68	69
----	----	----	----	----	----	----	----	----



From the list of numbers, write down

(a) a cube number

..... [1]

(b) a prime number.

..... [1]

2 A train journey starts at 23 30 and finishes at 07 15 the next day.



Find the time taken for this journey.

..... h min [1]

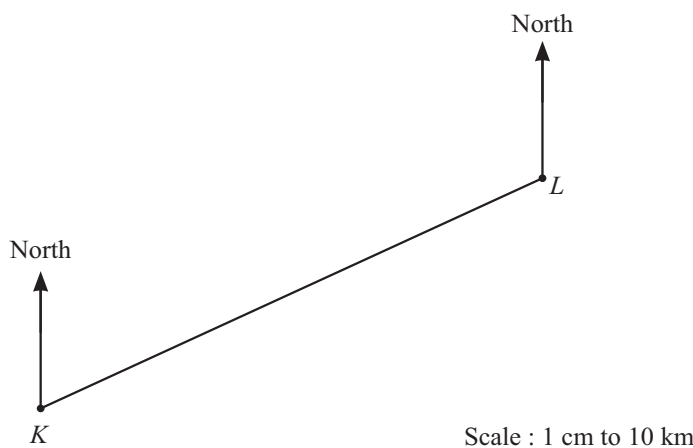
3 Simplify.



$$3p - t - p - 4t$$

..... [2]

4 The scale drawing shows the positions of town *K* and town *L*.
The scale is 1 cm represents 10 km.



(a) Find the actual distance between town *K* and town *L*.

..... km [2]

(b) Measure the bearing of town *L* from town *K*.

..... [1]

5 Each student in a class of 20 students records the number of coins in their pockets.



The table shows the results.

Number of coins	0	1	2	3	4	5	6
Frequency	3	1	7	8	0	0	1

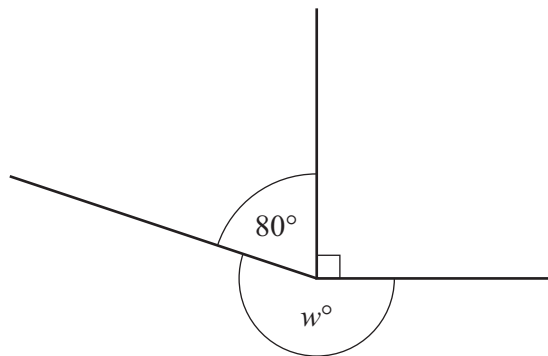
(a) Find the median.

..... [1]

(b) Calculate the mean.

..... [3]

6



NOT TO
SCALE

The diagram shows three lines meeting at a point.

Find the value of w .

$w =$ [1]

7 Solve the equation.



$$7 - h = 3 - 5h$$

$h =$ [2]

8 Sacha buys b books and m magazines.



The cost of each book is \$12 and the cost of each magazine is \$5.

Write an expression, in terms of b and m , for the total cost of the books and the magazines.

\$ [2]

9 Find the size of an interior angle of a regular 15-sided polygon.



..... [2]

10 **Without using a calculator**, work out $2\frac{1}{4} - 1\frac{11}{12}$.



You must show all your working and give your answer as a fraction in its simplest form.

..... [3]

11 Solve the simultaneous equations.

K

$$3p - 2q = 7$$

$$p + 2q = 1$$

$$p = \dots\dots\dots$$

$$q = \dots\dots\dots [2]$$

12

K

$$V = \sqrt[3]{\frac{x}{y}}$$

Rearrange the formula to write x in terms of V and y .

$$x = \dots\dots\dots [2]$$

13 Find the n th term of each sequence.

K

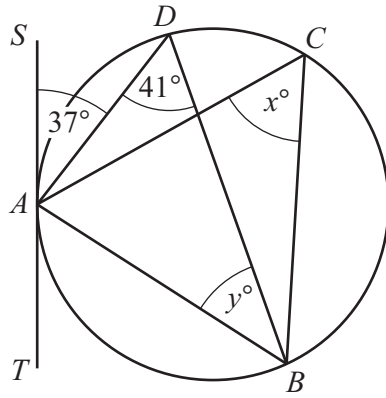
(a) 21, 13, 5, -3, -11, ...

$$\dots\dots\dots [2]$$

(b) 2.5, 5, 10, 20, 40, ...

$$\dots\dots\dots [2]$$

14 (a)



NOT TO SCALE

A, B, C and D lie on the circle.
 TAS is a tangent to the circle at A .

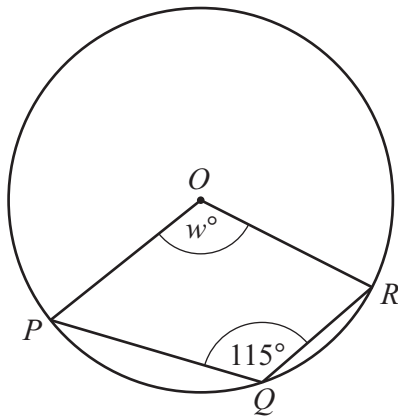
(i) Find the value of x .

$x = \dots\dots\dots [1]$

(ii) Find the value of y .

$y = \dots\dots\dots [1]$

(b)



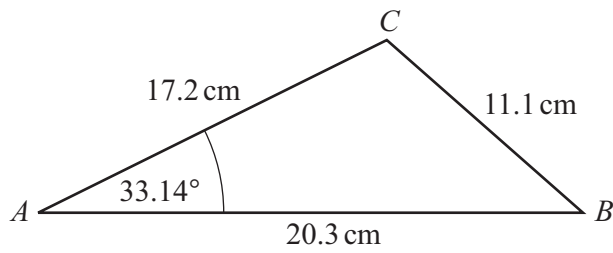
NOT TO SCALE

P, Q and R lie on the circle, centre O .

Find the value of w .

$w = \dots\dots\dots [2]$

16



NOT TO
SCALE

Calculate the shortest distance from C to AB .

..... cm [3]

17 Simplify.



(a) $18x^{18} \div 3x^3$

..... [2]

(b) $(125y^{75})^{\frac{2}{3}}$

..... [2]

- 18** Two mathematically similar solids have volumes 81 cm^3 and 24 cm^3 .
 The height of the smaller solid is 4.8 cm.

7

Calculate the height of the larger solid.

..... cm [3]

- 19** y is inversely proportional to $\sqrt{x+2}$.

7

When $x = 2$, $y = 3$.

Find y in terms of x .

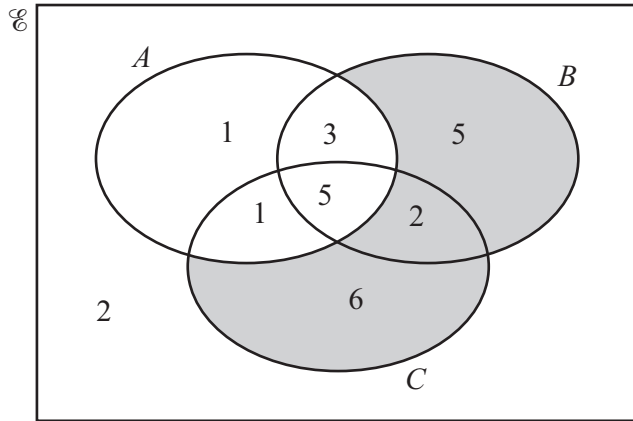
$y =$ [2]

- 20** Solve the equation $\tan x + 2 = 0$ for $0^\circ \leq x \leq 360^\circ$.

7

$x =$ or $x =$ [3]

21



The Venn diagram shows the number of elements in each region.

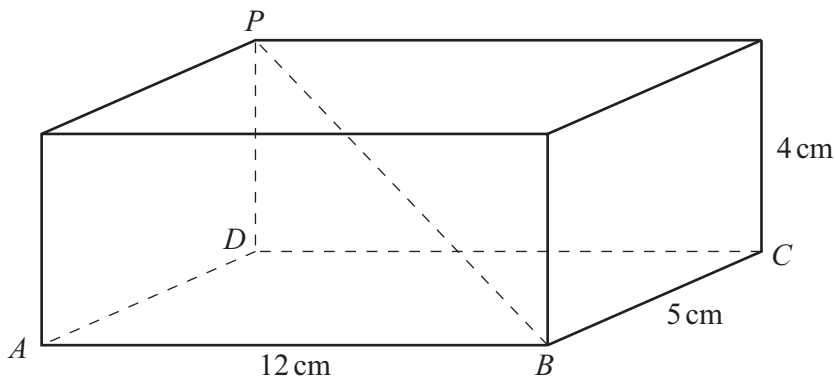
(a) Use set notation to describe the shaded region.

..... [1]

(b) Find $n(A \cap B \cap C)$.

..... [1]

22



NOT TO SCALE

The diagram shows a cuboid with a diagonal PB .

Calculate the angle between the diagonal PB and the base $ABCD$.

..... [4]

23 Write $x^2 + 8x - 7$ in the form $(x + a)^2 + b$.

7

..... [2]

24 A rectangle has an area of 150 m^2 , correct to the nearest square metre.

7

The length of the rectangle is 22 m, correct to the nearest metre.

Calculate the upper bound of the width of the rectangle.

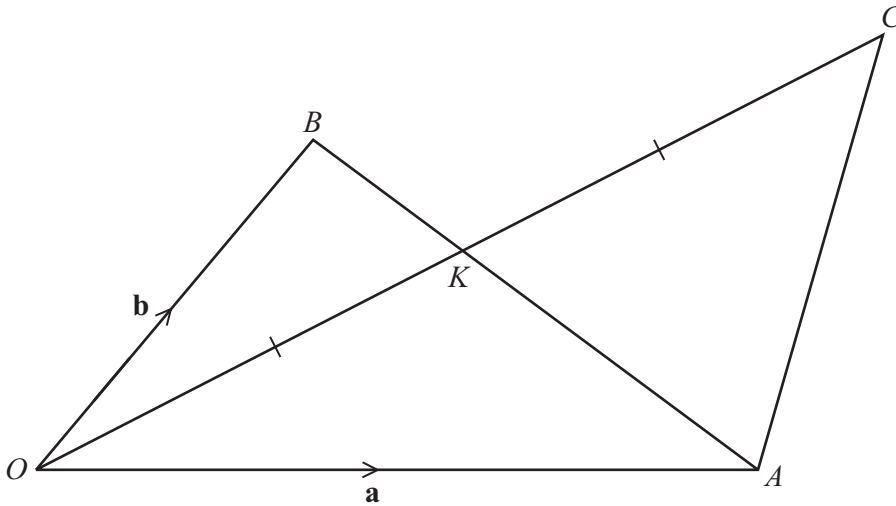
..... m [3]

25 Simplify.

7

$$\frac{3x - 2 - 3xy + 2y}{1 - y^2}$$

..... [4]



NOT TO
SCALE

In the diagram, $\vec{OA} = \mathbf{a}$ and $\vec{OB} = \mathbf{b}$.
 $AK : KB = 2 : 1$.
 $OK = KC$.

Find \vec{AC} in terms of \mathbf{a} and \mathbf{b} .
 Give your answer in its simplest form.

$\vec{AC} = \dots\dots\dots$ [4]